

1. Löse die Aufgaben der Rechenhäuser

Dividiere

Mal

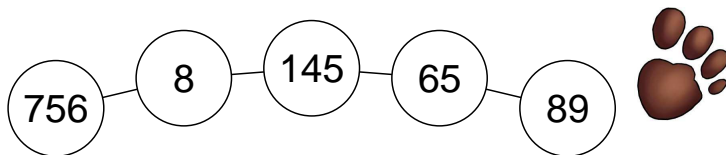
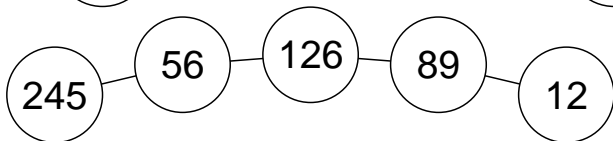
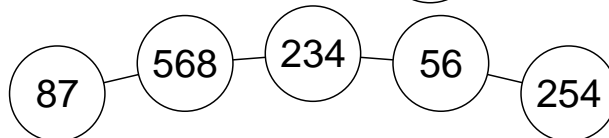
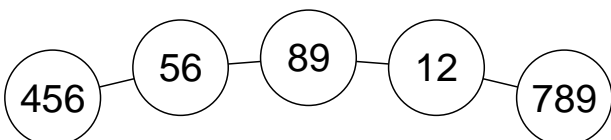
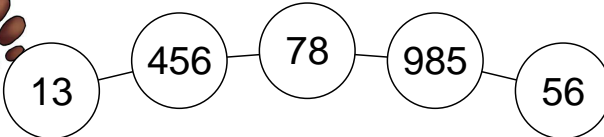
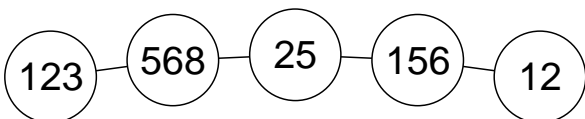
Division mit Probe

| | |
|-----|---|
| 651 | 4 |
| 234 | 5 |
| 987 | 3 |
| 653 | 9 |
| 423 | 6 |
| 678 | 5 |
| 265 | 8 |
| 876 | 9 |
| 546 | 3 |
| 875 | 9 |

| | |
|-----|---|
| 124 | 6 |
| 45 | 9 |
| 456 | 7 |
| 48 | 9 |
| 123 | 7 |
| 156 | 7 |
| 987 | 5 |
| 45 | 6 |
| 786 | 3 |
| 983 | 5 |

| | |
|------|---|
| 625 | 5 |
| 738 | 6 |
| 861 | 7 |
| 504 | 9 |
| 984 | 8 |
| 1638 | 2 |
| 774 | 3 |
| 5250 | 6 |

2. Zähle zusammen



3. Löse die Minusrechnungen



$$\boxed{1256} \quad - \quad \boxed{652}$$

$$\boxed{6589} \quad - \quad \boxed{3456}$$

$$\boxed{3589} \quad - \quad \boxed{1202}$$

$$\boxed{8795} \quad - \quad \boxed{562}$$

$$\boxed{2645} \quad - \quad \boxed{1245}$$

$$\boxed{9564} \quad - \quad \boxed{632}$$

$$\boxed{3256} \quad - \quad \boxed{189}$$

$$\boxed{3587} \quad - \quad \boxed{647}$$